

OCR

Oxford Cambridge and RSA

F

Friday 7 June 2019 – Afternoon

GCSE (9–1) Biology B (Twenty First Century Science)

J257/02 Depth in Biology (Foundation Tier)

Time allowed: 1 hour 45 minutes

You must have:

- a ruler (cm/mm)

You may use:

- a scientific or graphical calculator
- an HB pencil



Please write clearly in black ink. **Do not write in the barcodes.**

Centre number

--	--	--	--	--

Candidate number

--	--	--	--

First name(s) _____

Last name _____

INSTRUCTIONS

- Use black ink. You may use an HB pencil for graphs and diagrams.
- Answer **all** the questions.
- Where appropriate, your answers should be supported with working. Marks may be given for a correct method even if the answer is incorrect.
- Write your answer to each question in the space provided. If additional space is required, use the lined page(s) at the end of this booklet. The question number(s) must be clearly shown.

INFORMATION

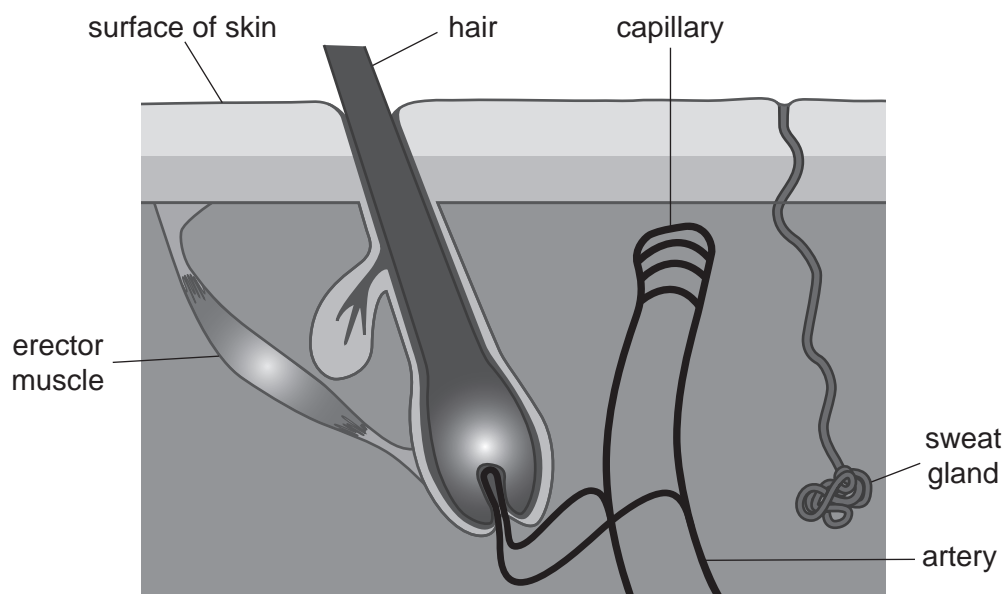
- The total mark for this paper is **90**.
- The marks for each question are shown in brackets [].
- Quality of extended responses will be assessed in questions marked with an asterisk (*).
- This document consists of **24** pages.

2

Answer **all** the questions.

- 1 The skin helps the human body to control its temperature.

Look at the diagram of structures in the skin.



- (a) Complete the table to describe how structures **in the skin** help to cool you down when you are too hot.

Structure	What the structure does	Appearance of skin
		Sweaty
	Relaxes	Hairs lying flat
	Gets wider (vasodilates)	Flushed red

[4]

(b) James is feeling cold.

(i) The hairs on his skin are standing on end.

Explain how this helps to warm him up.

.....
.....
.....
..... [2]

(ii) James starts to shiver.

Shivering happens because muscles are contracting rapidly.

Explain how this helps to warm him up.

.....
.....
.....
..... [2]

- 2 A teacher shows a plant to three students, Ben, Ling and Kai.



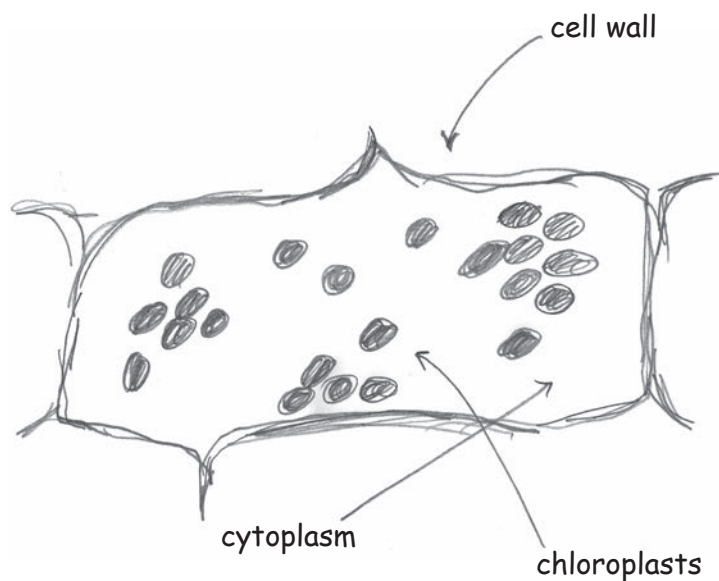
The teacher says it could be either a real living plant or a plastic plant.

She challenges the students to investigate whether the plant is real.

- (a) Ben takes a small piece of leaf from the plant. He places the piece of leaf on a microscope slide. He looks at the slide using a light microscope.

The piece of leaf appears to be made of cells.

Ben draws a scientific drawing of what he sees.



5

Ben could draw a better scientific drawing **without** changing the slide or the microscope.

Describe **four** ways Ben could improve his scientific drawing.

- 1
- 2
- 3
- 4 [4]

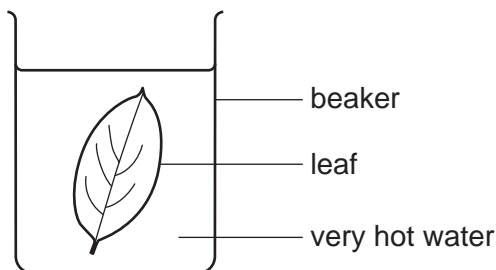
(b) Ling knows that living plants store glucose as starch.

She tests a leaf from the plant for starch.

Here is her method.

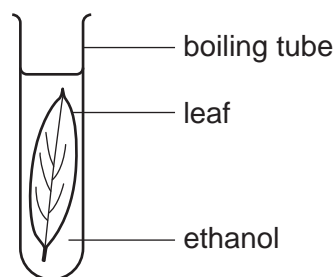
Step 1

Place the leaf in very hot water until it goes soft.



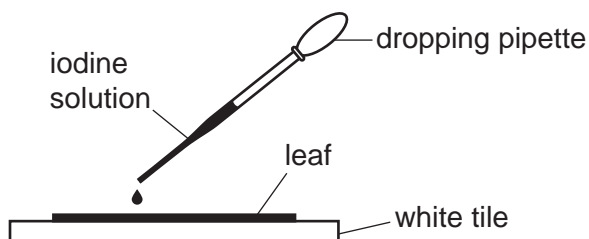
Step 2

Place the leaf in ethanol (HIGHLY FLAMMABLE) and heat until all the green colour has been removed from the leaf.



Step 3

Rinse the leaf with water, and then spread it out on a white tile and add a few drops of iodine solution.



(i) Write down **two** hazards in Ling's method **and** suggest a way of reducing the risk from each hazard.

hazard

way of reducing risk

.....

hazard

way of reducing risk

..... [4]

(ii) The colour change when iodine solution is added shows that the leaf contains starch.

Describe this colour change.

..... [1]

(c) Kai decides to investigate how the plant responds to light.

He places the plant on a sunny windowsill and leaves it there until next week's lesson.

(i) Write a testable prediction that describes what will happen if the plant is real.

.....
..... [1]

(ii) Kai finds that the plant has grown towards the window.

Use ideas about plant hormones to explain how this has happened.

.....
.....
.....
.....
.....
.....
.....
.....
..... [4]

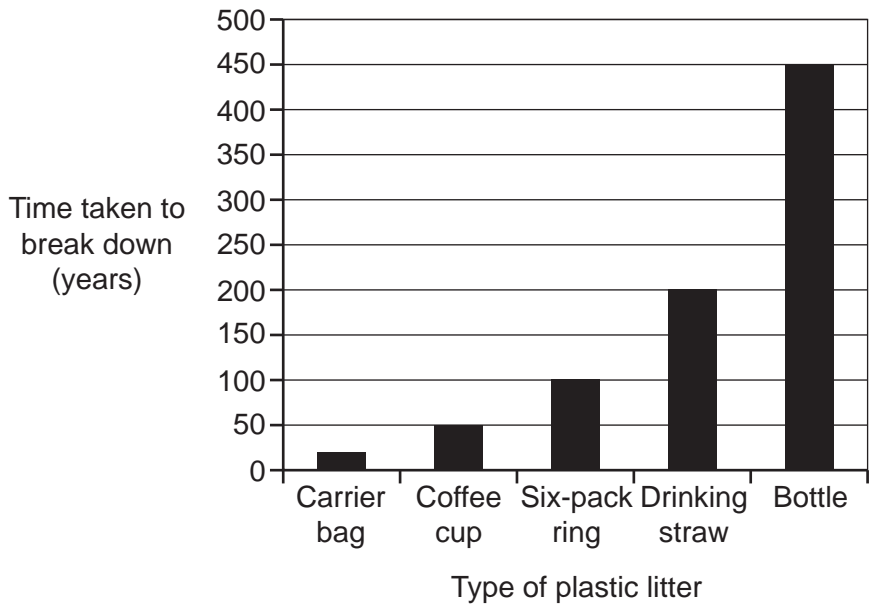
(d) The students conclude that the plant is a real living plant.

Use evidence from the students' investigations to support this conclusion.

.....
.....
.....
..... [2]

3 Plastic pollution in the sea is a big problem.

(a) The bar chart shows how long it takes for different types of plastic litter to break down in the sea.



(i) Which type of plastic litter takes the longest time to break down, and how long does it take?

type of plastic litter

time taken to break down years [2]

(ii) A crisp packet takes 80 years to break down in the sea.

Which types of litter, shown on the bar chart, will break down faster than a crisp packet?

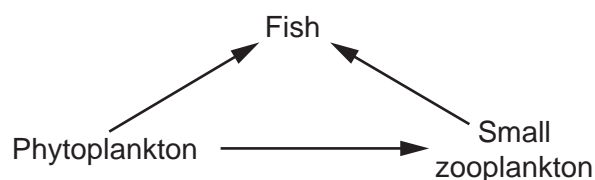
Tick (✓) **two** boxes.

- Carrier bag
- Coffee cup
- Six-pack ring
- Drinking straw
- Bottle

[1]

9

(b) Look at the food web from the North Sea.



(i) Add the following information to the food web above:

- Phytoplankton are eaten by shellfish.
- Shellfish and fish are eaten by seagulls.

[2]

(ii) Draw straight lines to join each **part of an ecosystem** to the correct **example from the food web**.

Part of an ecosystem	Example from the food web
Community	All the organisms and their North Sea environment
Ecosystem	All the organisms in the food web
Individual organism	All the fish
Population	A fish

[3]

4 Fossils provide evidence for evolution.

(a) A fossil of an extinct animal called *Archaeopteryx* was discovered in 1861. A photo of the fossil is shown in **Fig. 4.1**.

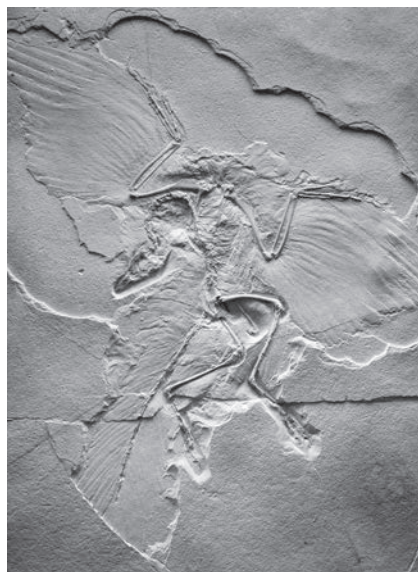


Fig. 4.1

Archaeopteryx has:

- wings and feathers, like a bird
- teeth and three fingers with claws, like many dinosaurs.

(i) How does the *Archaeopteryx* fossil provide evidence that birds evolved from dinosaurs?

Tick (✓) **one** box.

It has features of both birds and dinosaurs.

It is now extinct.

It is part of the fossil record.

It shows natural selection.

[1]

(ii) Twelve fossils of *Archaeopteryx* have been found.

The twelve *Archaeopteryx* fossil animals vary in appearance.

Suggest what could have caused these differences in appearance.

.....

.....

.....

..... **[2]**

15

(c) A couple is thinking about having a baby.

The woman and the man both have the alleles **Ff**.

The Punnett square shows the possible combinations of alleles in their offspring.

	F	f
F	FF	Ff
f	Ff	ff

Use the Punnett square to help you answer the questions.

(i) What proportion of their offspring is likely to have the allele combination **FF**?

..... in every [1]

(ii) What percentage of their offspring is likely to have the allele combination **Ff**?

Percentage = % [2]

(iii) What is the probability that any one of their offspring will have cystic fibrosis?

Probability = [2]

17
BLANK PAGE

PLEASE DO NOT WRITE ON THIS PAGE

6 Photosynthesis takes place in plants.

(a) Put **one** tick in each row of the table to show the function of each plant structure.

Plant structure	Function		
	Transports sugars made by photosynthesis.	Carries out the reactions of photosynthesis.	Transports water needed for photosynthesis.
Chloroplast			
Phloem			
Xylem			

[1]

Eve is investigating the effect of temperature on photosynthesis in pondweed.

This is her method.

1. Put a piece of pondweed in a boiling tube.
2. Cover the pondweed with sodium hydrogen carbonate solution (a source of carbon dioxide).
3. Put the boiling tube in a beaker of water at one of six temperatures.
4. Use a gas syringe to collect the bubbles of gas released from the pondweed.
5. Record the volume of gas collected in five minutes.
6. She repeats the experiment three times at each temperature.

Fig. 6.1 shows the apparatus Eve uses.

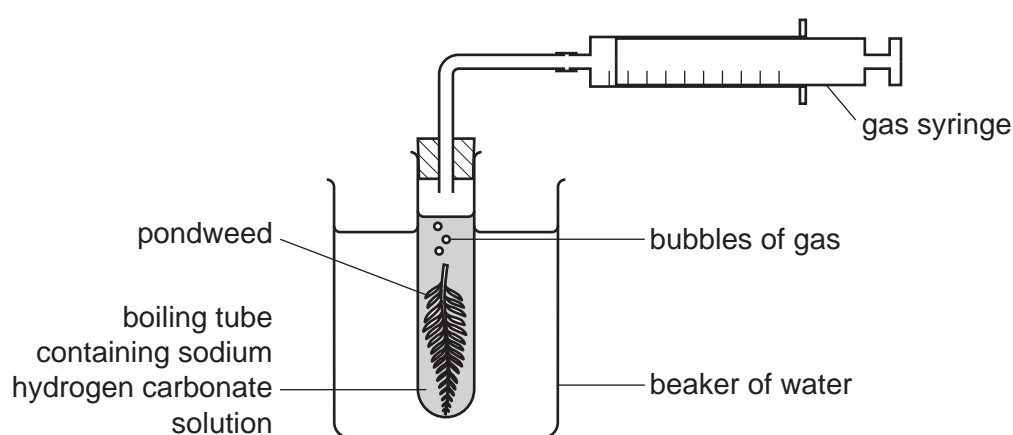


Fig. 6.1

- (b) Temperature is the variable that Eve will change.

Write down **one** variable that Eve should control **and** describe how she could control it.

.....

.....

.....

..... [2]

- (c) After she has finished the investigation, Eve uses her data to plot the graph in **Fig. 6.2**.

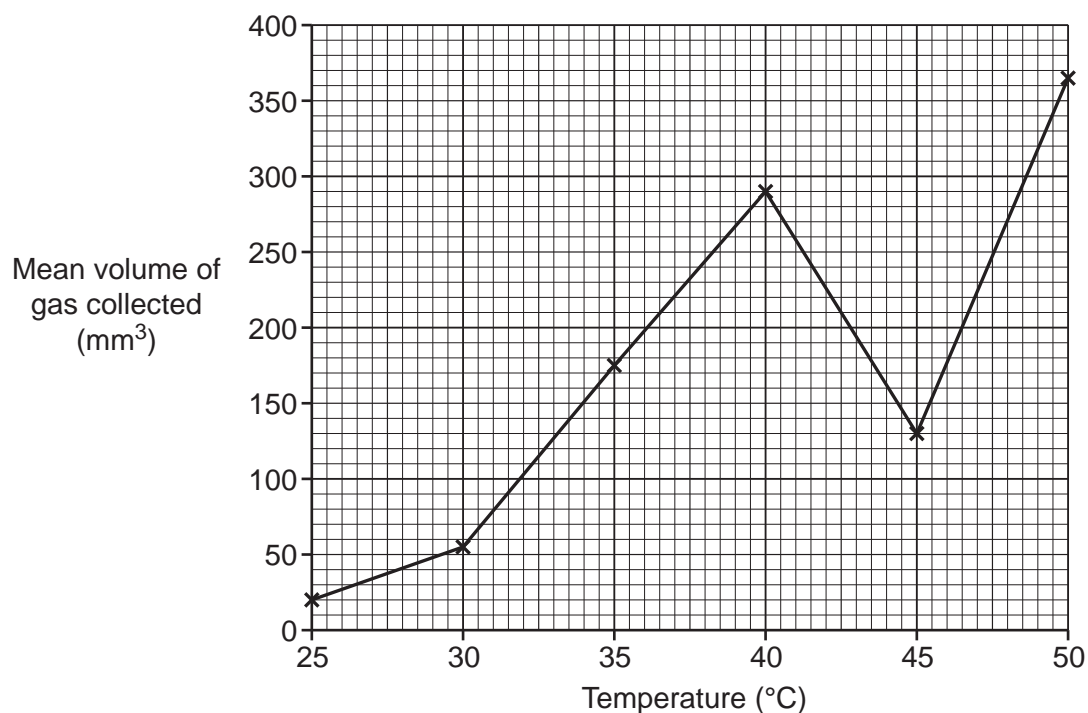


Fig. 6.2

- (i) Eve decides to repeat the experiment at 45°C so that she can take new measurements at this temperature.

Use evidence from **Fig. 6.2** to justify Eve's decision.

.....

.....

.....

..... [2]

20

(ii) Here are Eve's new measurements.

Temperature (°C)	Volume of gas collected (mm ³)		
	Repeat 1	Repeat 2	Repeat 3
45	354	360	351

Use Eve's new measurements to complete the graph in **Fig. 6.3**.

You may use the space below for working out.

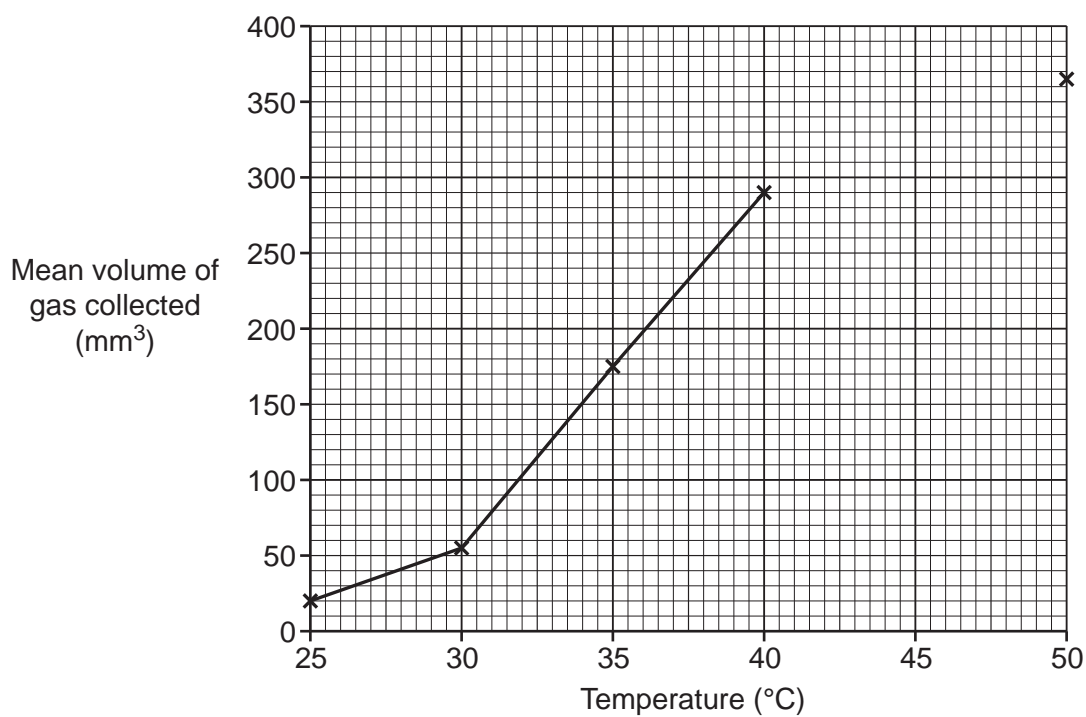


Fig. 6.3

[2]

ADDITIONAL ANSWER SPACE

If additional space is required, you should use the following lined page(s). The question number(s) must be clearly shown in the margin(s).

A large rectangular area with a solid vertical line on the left side and horizontal dotted lines extending across the page, providing space for writing answers.

A large area of the page is reserved for writing, featuring a vertical solid line on the left side and horizontal dotted lines extending across the page.



Oxford Cambridge and RSA

Copyright Information

OCR is committed to seeking permission to reproduce all third-party content that it uses in its assessment materials. OCR has attempted to identify and contact all copyright holders whose work is used in this paper. To avoid the issue of disclosure of answer-related information to candidates, all copyright acknowledgements are reproduced in the OCR Copyright Acknowledgements Booklet. This is produced for each series of examinations and is freely available to download from our public website (www.ocr.org.uk) after the live examination series.

If OCR has unwittingly failed to correctly acknowledge or clear any third-party content in this assessment material, OCR will be happy to correct its mistake at the earliest possible opportunity.

For queries or further information please contact The OCR Copyright Team, The Triangle Building, Shaftesbury Road, Cambridge CB2 8EA.

OCR is part of the Cambridge Assessment Group; Cambridge Assessment is the brand name of University of Cambridge Local Examinations Syndicate (UCLES), which is itself a department of the University of Cambridge.